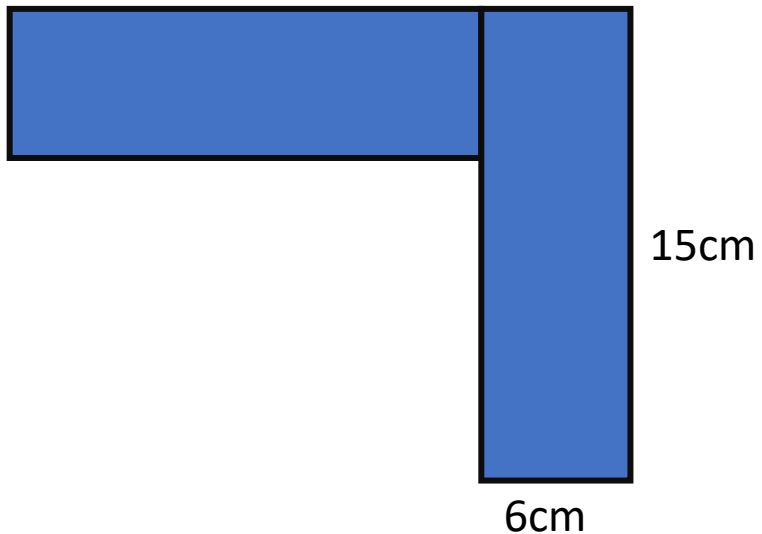


12.1.21 Daily Ten

1. $12 \times 11 =$
2. Round 6084 to the nearest 100.
3. What is 1000 more than 9609?
4. $3100 \div 10 =$
5. $6000 - 4999 =$
6. $36 + 57 + 64 + 43 =$
7. $5 \times 4 \times 2 =$
8. CII + LIV =
9. How many cm in 1Km ?
10. What is the perimeter of this rectilinear shape?



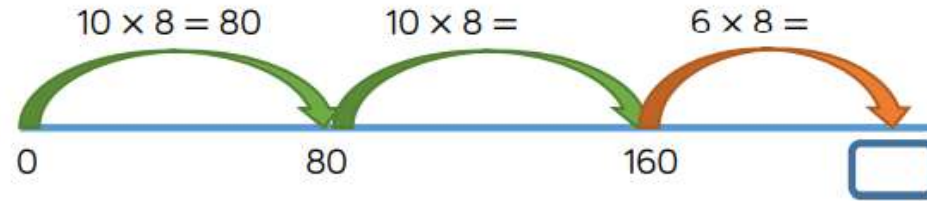
12.1.21

LI: To multiply a two-digit number by a one-digit number

Fluency

[Spr4.1.5 - Written methods on Vimeo](#)

- There are 8 classes in a school.
Each class has 26 children.
How many children are there altogether?
Complete the number line to solve the problem.

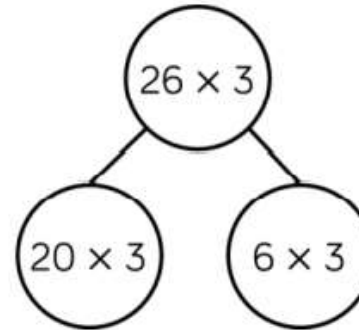


Use this method to work out the multiplications.

$$16 \times 7 \quad 34 \times 6 \quad 27 \times 4$$

- Rosie uses Base 10 and a part-whole model to calculate 26×3
Complete Rosie's calculations.

Tens	Ones



Use Rosie's
method to work
out:

$$\begin{array}{l} 36 \times 3 \\ 24 \times 6 \\ 45 \times 4 \end{array}$$

Complete Tuesday worksheet and Tuesday True or False question.