


Name: _____ Date: _____



Can you label the different stages of the water cycle in this diagram?



accumulation

evaporation

transpiration

condensation

surface run-off

precipitation

Can you explain how the water cycle works?

Name: _____ Date: _____



Can you draw a picture of the water cycle and label the different parts of the process?

accumulation
condensation

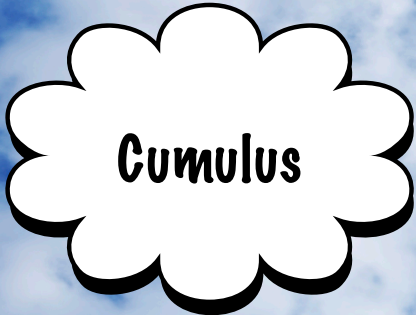
evaporation
surface run-off

transpiration
precipitation

Can you explain how the water cycle works?


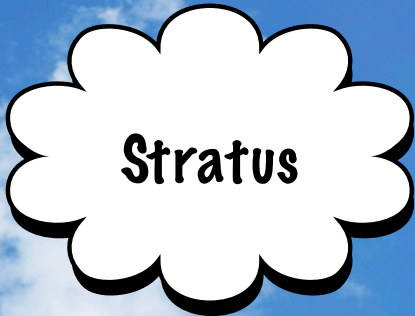
Name: _____ Date: _____

Find out about these different kinds of clouds.
What do they look like?
How are they formed?
What kind of precipitation (if any) do they give?



Handwriting practice box for Cumulus clouds, consisting of a rectangular area with seven horizontal lines.

Handwriting practice box for Stratus clouds, consisting of a rectangular area with seven horizontal lines.



Handwriting practice box for Cirrus clouds, consisting of a rectangular area with seven horizontal lines.

Handwriting practice box for Lenticular clouds, consisting of a rectangular area with seven horizontal lines.

