

# Subtraction – crossing 10 (2)

- 1 Jack has 11 apples.  
Mo has 5 apples.

Jack	11
Mo	5

How many more apples does Jack have than Mo?

Tick the number sentence that answers the question.

$11 + 5 = 16$


$11 - 5 = 6$

- 2 Eva has 13 sweets.  
Teddy has 6 sweets.

How many more sweets does Eva have than Teddy?

$$\square - \square = \square$$

Eva has  more sweets than Teddy.

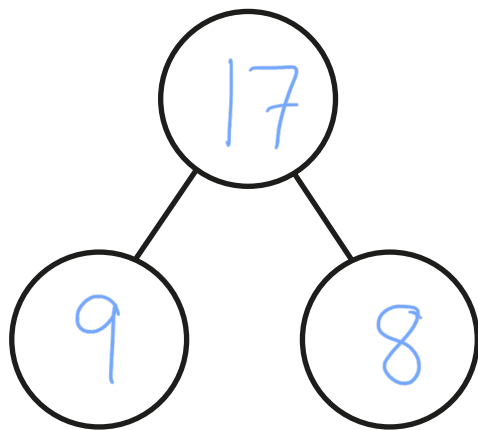


**3** There are 17 animals on a farm.

There are 9 horses.

The rest of the animals are sheep.

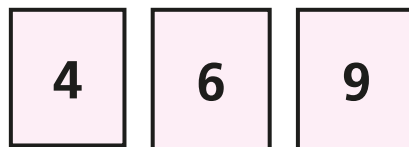
a) How many sheep are there?



$$\boxed{17} - \boxed{9} = \boxed{8}$$

There are  $\boxed{8}$  sheep.

**4**



a) Choose two cards to complete the subtraction.

e.g.  $\boxed{1} \boxed{6} - \boxed{4} = \boxed{12}$

b) How many different subtractions can you make?

Work out the answer to each one.

